

Chem 1141 Fall 2014 Exam 1A

Name: KEY

Please write your full name, and which exam version (1A) you have on the scantron sheet.

Multiple Choice: _____ /30

Q11: _____ /10

Q12: _____ /10

Q13: _____ /10

Q14: _____ /10

Q15: _____ /10

Q16: _____ /10

Q17: _____ /10

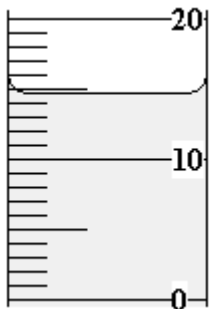
BONUS: _____ /3

TOTAL: _____ /100



Multiple Choice. [3 points each.] Record your answers to the multiple choice questions on the scantron sheet.

- Q1. Water has a boiling point of 100 °C. This is an example of a(n):
a) Chemical Property b) Physical Property c) Intensive Property
d) Extensive Property **e) Both (b) and (c)**
- Q2. How much water is contained in the 20-mL measuring cylinder shown below:



- a) 10.5 mL b) 15 mL c) 16.0 mL
d) 14.8 mL e) 10.48 mL
- Q3. Isotopes are:
a) Atoms that only differ in the number of electrons they contain
b) Atoms that only differ in the number of neutrons they contain
c) Atoms that only differ in the number of protons they contain
d) Atoms that only differ in the number of nuclei they contain
e) Atoms that only differ in the number of electrons in the valence shell
- Q4. The nuclide symbol for the species that has the same number of electrons as $^{37}_{17}\text{Cl}^-$ is
a) $^{37}_{17}\text{Cl}$ **b) $^{35}_{16}\text{S}^{2-}$** c) $^{32}_{16}\text{S}$ d) $^{31}_{15}\text{P}^{3+}$ e) $^{34}_{14}\text{Si}$
- Q5. The formulas of the nitrite, phosphide, and nitrate ions are represented, respectively, as:
a) NO_2^- , PO_4^{3-} , NO_4^- b) N^{3-} , PO_3^{3-} , NO_3^-
c) NO^- , P^{5-} , NO_3^- **d) NO_2^- , P^{3-} , NO_3^-** e) NO_3^- , PO_2^- , N^{3-}
- Q6. An irregularly shaped object was weighed by the following difference:

$$\begin{aligned} \text{Watch glass + metal} &= 56.7813 \text{ g} \\ \text{Watch glass} &= 35.4725 \text{ g} \end{aligned}$$

The volume of the metal was determined by placing the metal in a graduated cylinder that had water in it and measuring the volume difference.

$$\begin{aligned} \text{Graduated cylinder + water + metal} &= 14.15 \text{ mL} \\ \text{Graduated cylinder + water} &= 11.24 \text{ mL} \end{aligned}$$

The density should be reported as:

- a) 1.90 g/mL b) 19.5 g/mL **c) 7.32 g/mL** d) 7.3 g/mL e) 7.3226 g/mL

- Q7. How many significant figures are in the following measurement: 6.080×10^4 mL water?
 a) 2 b) 3 c) 4 d) 5 e) 6
- Q8. Which of the following is a mixture?
 a) beer b) steam c) iron d) table sugar e) sodium chloride
- Q9. Which of the following doesn't exist as a diatomic molecule (i.e. which is wrong as written)?
 a) F_2 b) C_2 c) O_2 d) Cl_2 e) H_2
- Q10. Which of the following elements is most likely to form an ion with a 2- charge?
 a) O b) Mg c) Na d) Cl e) Li

Short Response.

Show all work to receive credit. You must use the factor-label (conversion-factor) method for all conversions. Be sure to show all units and write your answers using the correct number of significant figures or decimal places.

- Q11. [10 pts.] The world record for the 100-meter dash is 9.58 seconds, ran by Usain Bolt in 2009. Convert this to miles per hour. Note: 1.000 mile = 1.603 km.



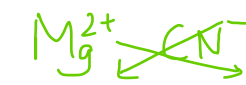
$$\frac{100m}{9.58s} \times \frac{60s}{1min} \times \frac{60min}{1hr} \times \frac{1km}{10^3m} \times \frac{1mi}{1.603km} = \frac{23.4mi}{hr} \quad (3s.f.)$$

- Q12. [10 pts.] a) Give the name of group IIA of the periodic table: Alkaline Earth Metals
- b) Give the name of group VIIA of the periodic table: Halogens
- c) Name an element in the second period of the periodic table: Lithium, beryllium, boron, ...
- d) Name an element that is a metalloid: Silicon, Germanium, ...
- e) Name an element that is a transition metal: Scandium, Titanium, Vanadium, Chromium, ...

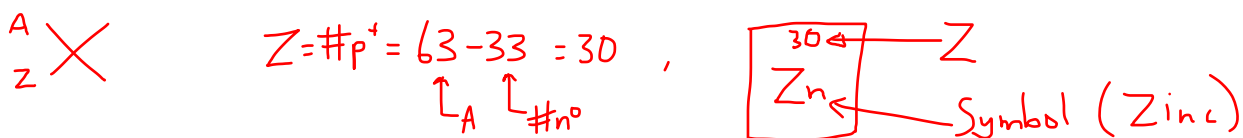
Q13. [10 pts.] Provide the results of the following calculations with the correct number of significant figures:

- a) $18.125 + 0.00213 + 71.9 =$ 90.0 (1 d.p.)
- b) $(3.771 \times 3.27) / 2.00 =$ 6.17 (3 s.f.)
- c) $0.0004760 \times 0.27615 =$ 1.314×10^{-4} (4 s.f.)
- d) $80.321 - 79.783 =$ 0.538 (3 d.p.)
- e) $(1.230 + 2.17) / (34.0 - 13.0) =$ 0.162 (3 s.f.)

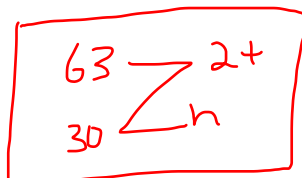
Q14. [10 pts.] Write formulas for the following compounds:

- a) copper(I) sulfide Cu_2S 
- b) heptanitrogen decoxide N_7O_{10}
- c) ferric sulfate $\text{Fe}_2(\text{SO}_4)_3$ 
- d) magnesium cyanide $\text{Mg}(\text{CN})_2$ 
- e) tetrabromine hexachloride Br_4Cl_6

Q15. [10 pts.] One isotope of a metallic element has the mass number of 63, and 33 neutrons. The cation derived from this isotope has 28 electrons. Write the nuclide symbol for this isotope. Be sure to include the charge.
Hint: see one of the multiple choice questions for an example of a nuclide symbol.



Zinc atom, $30p^+ + 30e^-$ (neutral)
 if $28e^- \Rightarrow$ lost $2e^-$
 $\Rightarrow 2+$ charge!



Q16. [10 pts.] Name the following compounds:

- a) Na_2SO_4 Sodium sulfate
- b) CuNO_3 Copper (I) nitrate (OR) Cuprous nitrate
- c) Cl_3O_9 Trichlorine nonoxide
- d) $\text{K}_3\text{PO}_4 \cdot 2\text{H}_2\text{O}$ Potassium phosphate dihydrate
- e) CCl_4 Carbon tetrachloride

Q17. [10 pts.] The density of mercury is 13.6 g/cm^3 . How many quarts (qt) does 121 g of Hg occupy? (1.000 L = 1.057 qt)

$$d = \frac{m}{V} \Rightarrow V = \frac{m}{d} = \frac{121 \text{ g}}{13.6 \text{ g/cm}^3} = 8.90 \text{ cm}^3 \text{ (3 s.f.)}$$

$$8.90 \text{ cm}^3 \times \frac{1 \text{ L}}{1000 \text{ cm}^3} \times \frac{1.057 \text{ qt}}{1.000 \text{ L}} = 9.41 \times 10^{-3} \text{ qt} \text{ (3 s.f.)}$$

BONUS:

The white blood cell concentration in normal blood is approximately $12,000 \text{ cells/mm}^3$ of blood. How many white blood cells does a normal adult with 5-L of blood have? Express the answer in scientific notation.

$$5 \text{ L} \times \frac{10^3 \text{ cm}^3}{1 \text{ L}} \times \left(\frac{10 \text{ mm}}{1 \text{ cm}} \right)^3 \times \frac{12,000 \text{ cells}}{\text{mm}^3} = 6 \times 10^{10} \text{ cells}$$

$$\uparrow \text{ (OR) } \dots \times \left(\frac{10^{-2} \text{ m}}{\text{cm}} \right)^3 \times \left(\frac{\text{mm}}{10^{-3} \text{ m}} \right)^3 \times \dots$$